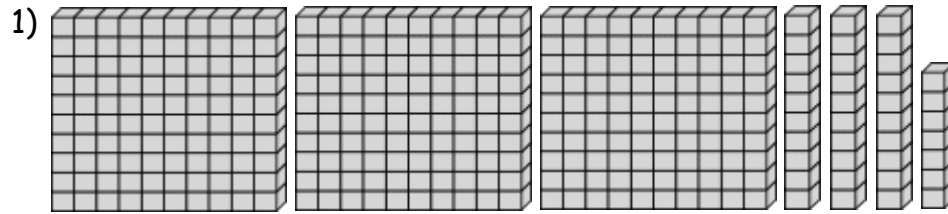
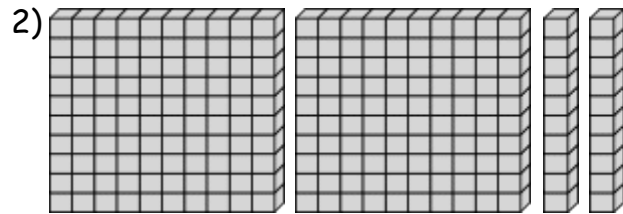


Name: _____ Date: _____

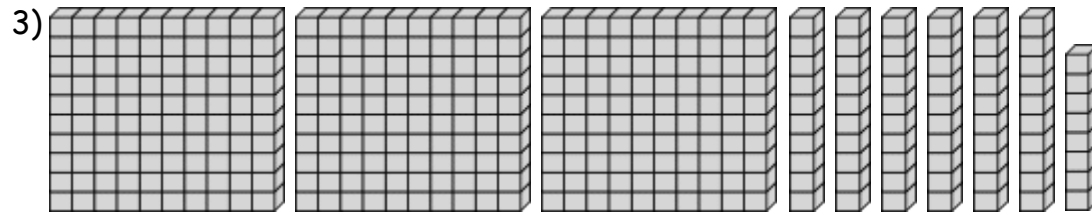
Hundreds (100's), Tens (10's), and Ones (1's)




_____ Hundreds + _____ Tens (10's) + _____ Ones (1's) = _____



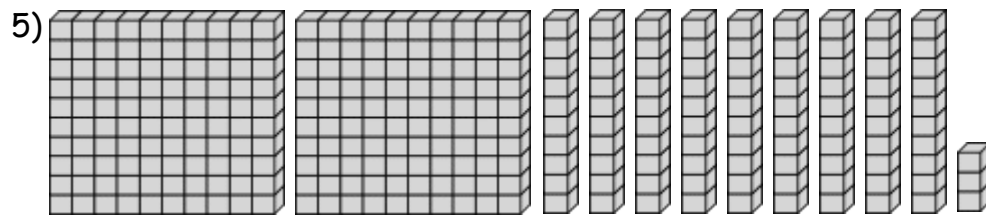
_____ Hundreds + _____ Tens (10's) + _____ Ones (1's) = _____



_____ Hundreds + _____ Tens (10's) + _____ Ones (1's) = _____



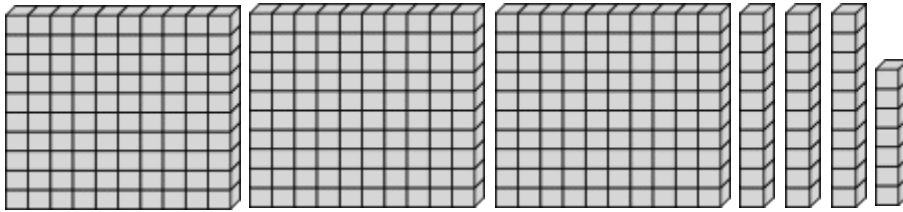
_____ Hundreds + _____ Tens (10's) + _____ Ones (1's) = _____



_____ Hundreds + _____ Tens (10's) + _____ Ones (1's) = _____

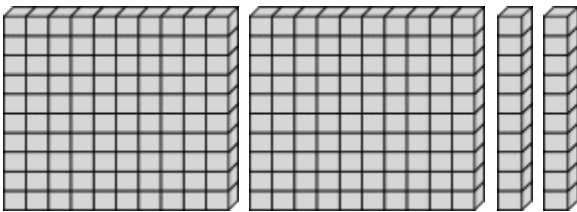
Answer Key

1)



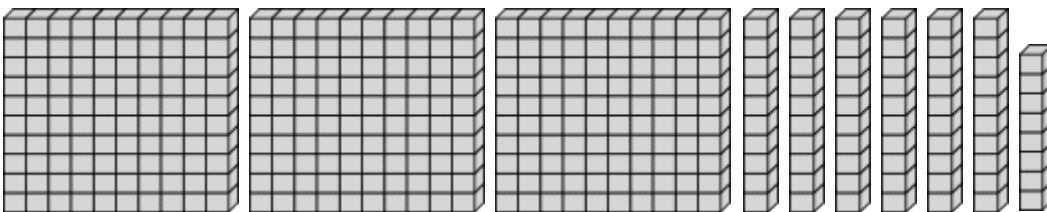
$$\underline{\quad 3 \quad} \text{ Hundreds} + \underline{\quad 3 \quad} \text{ Tens (10's)} + \underline{\quad 7 \quad} \text{ Ones (1's)} = \underline{\quad 337 \quad}$$

2)



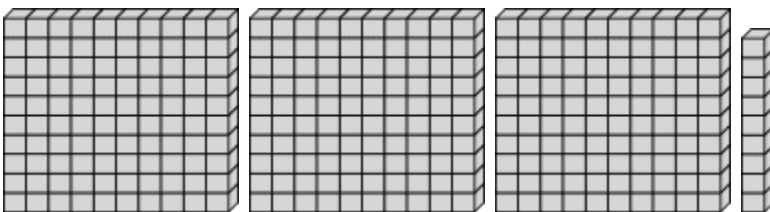
$$\underline{\quad 2 \quad} \text{ Hundreds} + \underline{\quad 2 \quad} \text{ Tens (10's)} + \underline{\quad 0 \quad} \text{ Ones (1's)} = \underline{\quad 220 \quad}$$

3)



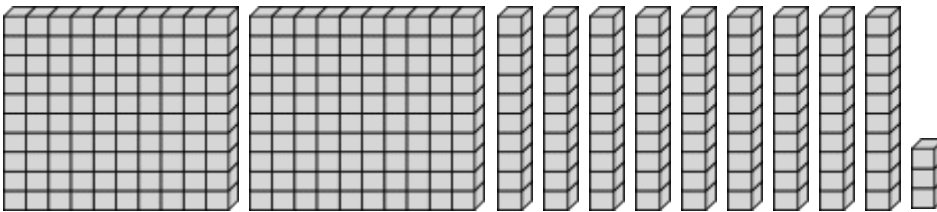
$$\underline{\quad 3 \quad} \text{ Hundreds} + \underline{\quad 6 \quad} \text{ Tens (10's)} + \underline{\quad 8 \quad} \text{ Ones (1's)} = \underline{\quad 368 \quad}$$

4)



$$\underline{\quad 3 \quad} \text{ Hundreds} + \underline{\quad 0 \quad} \text{ Tens (10's)} + \underline{\quad 9 \quad} \text{ Ones (1's)} = \underline{\quad 309 \quad}$$

5)



$$\underline{\quad 2 \quad} \text{ Hundreds} + \underline{\quad 9 \quad} \text{ Tens (10's)} + \underline{\quad 3 \quad} \text{ Ones (1's)} = \underline{\quad 293 \quad}$$